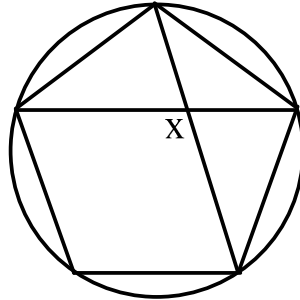
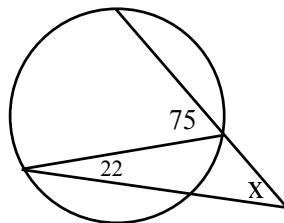


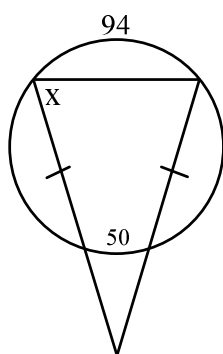
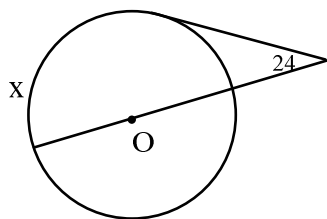
Regular pentagon inscribed in the circle. Find the value of  $x$ .



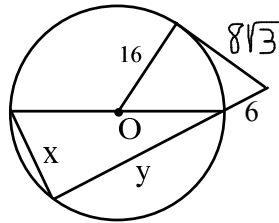
Find the value of  $x$ .



Find the value of  $x$  in circle O.



Find the value of  $x$  and  $y$ .



Find the value of  $x$ .

