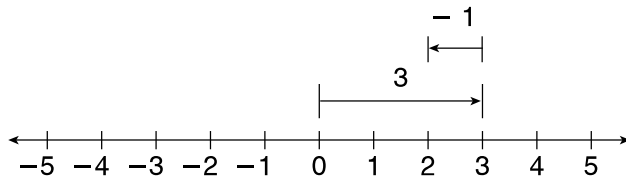


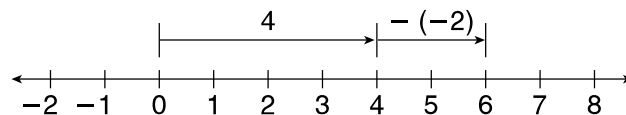
LESSON
9-5 **Practice A**
Subtracting Integers

Write the subtraction modeled on each number line.

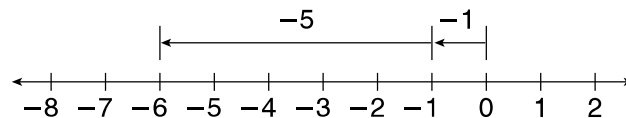
1.



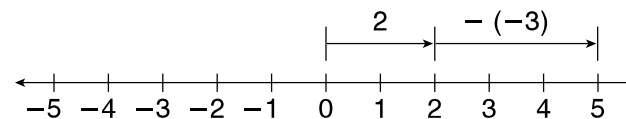
2.



3.



4.



Circle the letter of the correct difference.

5. $-5 - 2$

A 3

B -7

C 7

D -3

6. $1 - (-4)$

F -5

G 3

H -3

J 5

Find each difference.

7. $2 - 9$

8. $-3 - 7$

9. $4 - (-5)$

10. In the first play of the football game, the Lions gained 10 yards and then lost 5 yards by a penalty. Write a subtraction expression to model this situation.

11. This morning, the temperature was 4°F below zero. By evening the temperature had dropped 5 degrees. Write a subtraction expression to model this situation.
