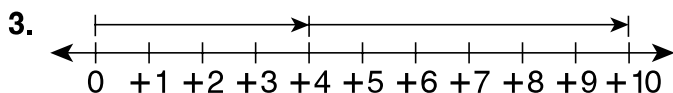
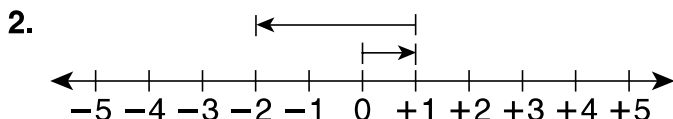
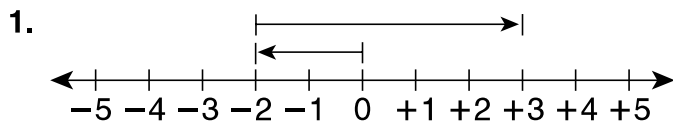


LESSON
9-5 **Homework and Practice**
Subtracting Integers

Write the subtraction modeled on each number line.



Find each difference.

4. $-7 - (-2)$ _____ 5. $6 - (-8)$ _____ 6. $-2 - 7$ _____

7. $5 - 6$ _____ 8. $-4 - (-6)$ _____ 9. $-2 - 0$ _____

10. $4 - (-1)$ _____ 11. $-9 - (-9)$ _____ 12. $-4 - (-3)$ _____

Evaluate $n - (-4)$ for each value of n .

13. $n = 1$ _____ 14. $n = 6$ _____ 15. $n = -7$ _____

16. $n = 0$ _____ 17. $n = -1$ _____ 18. $n = 3$ _____

19. In a golf tournament, Lindsay scored a $+3$ on the first round and a -1 on the second round. What was the difference between her scores on the first two rounds?
- _____

20. Lake Champlain has an elevation of 95 feet above sea level. The elevation of Death Valley is 282 feet below sea level. What is the difference in the two locations' elevations?
- _____