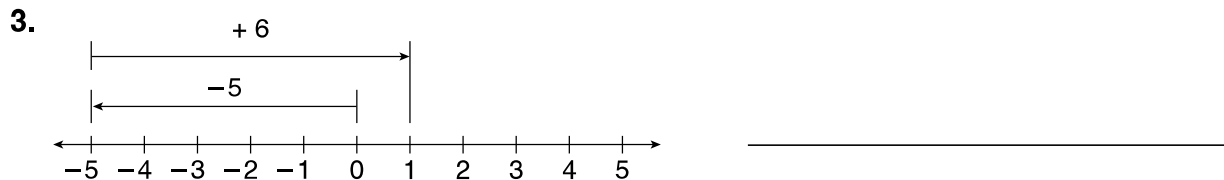
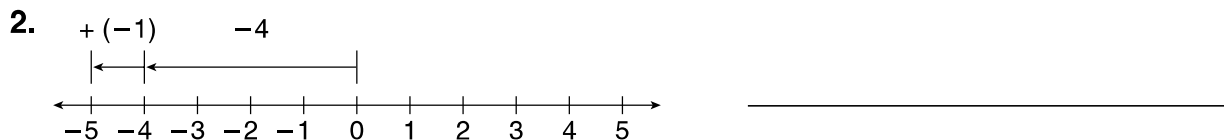
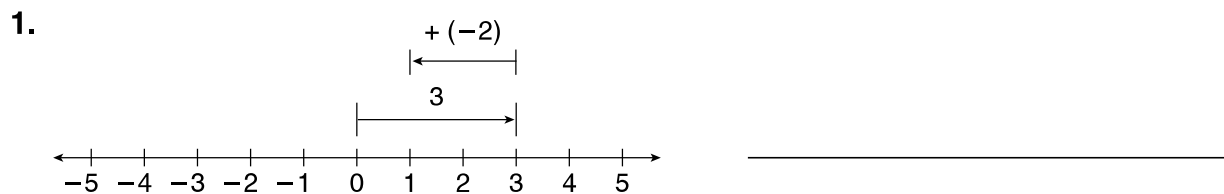


LESSON
9-4 **Practice B**
Adding Integers

Write the addition modeled on each number line.



Find each sum.

4. $5 + (-1)$ _____

5. $-3 + 2$ _____

6. $-8 + (-4)$ _____

7. $-2 + (-1)$ _____

8. $9 + (-6)$ _____

9. $-10 + 5$ _____

10. $12 + (-3)$ _____

11. $0 + (-7)$ _____

12. $17 + (-9)$ _____

Evaluate $n + (-1)$ for each value of n .

13. $n = 2$ _____

14. $n = -4$ _____

15. $n = 5$ _____

16. $n = -3$ _____

17. $n = 1$ _____

18. $n = 0$ _____

19. When Calvin played golf today, he scored a $+1$ on the first hole, a -2 on the second hole, a -1 on the third, and a $+4$ on the fourth. What was Calvin's total score for the first four holes?
- _____

20. The average temperature for February was 4°F below zero. By March, the average temperature had increased 11 degrees. What was the average temperature in March?
- _____