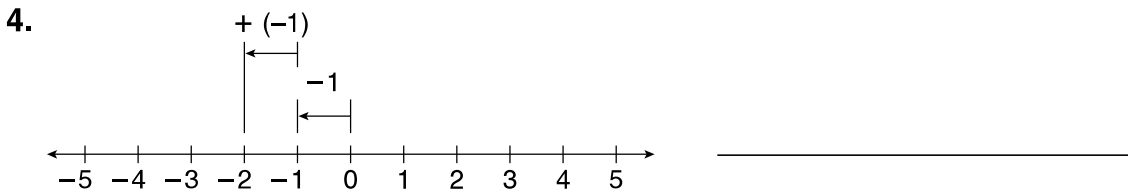
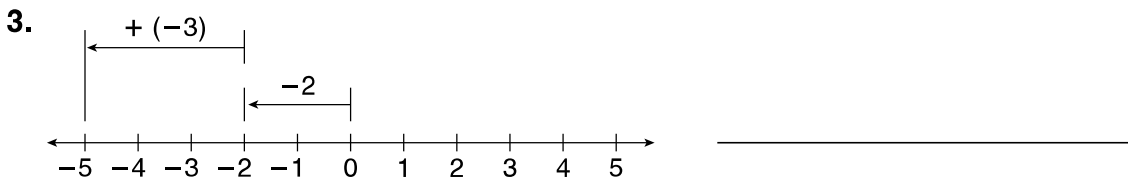
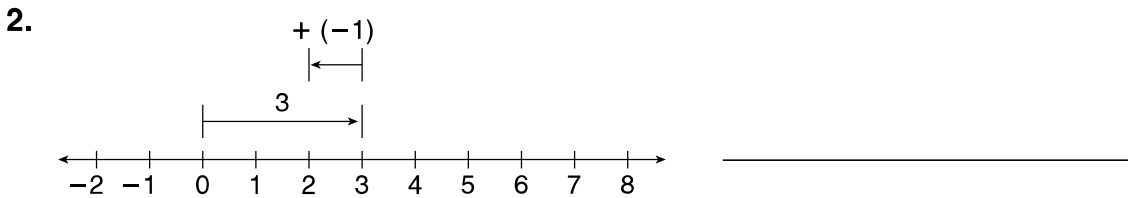
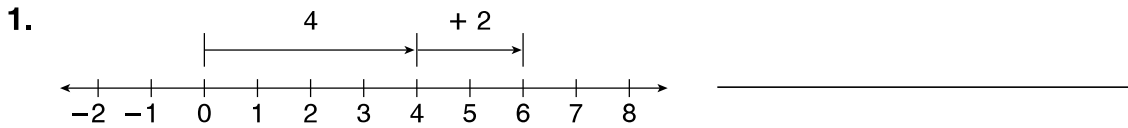


LESSON
9-4 **Practice A**
Adding Integers

Write the addition modeled on each number line.



Circle the letter of the correct sum.

5. $4 + (-1)$
A 5
B 3
C -4
D -5

6. $(-2) + (-1)$
F -3
G 3
H 1
J -1

Find each sum.

7. $9 + 2$

8. $8 + (-4)$

9. $-3 + (-12)$

10. Brian is on the 5th floor of his apartment building. He goes down 3 floors to visit his neighbor. Write an addition expression to model this situation.

11. At 9:00 P.M. the temperature was 3°F below zero. During the next hour, the temperature increased 2°F . Write an addition expression to model this situation.
