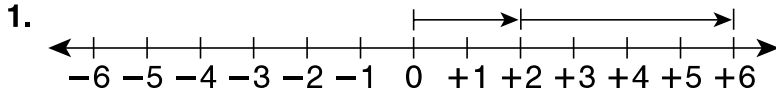
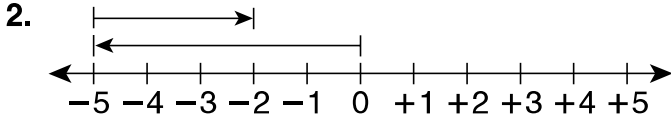
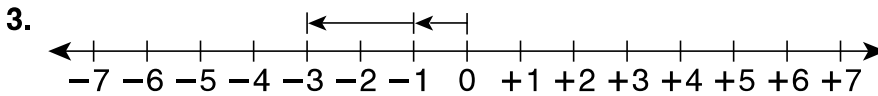


LESSON **9-4** **Homework and Practice**
Adding Integers

Write the addition modeled on each number line.







Find each sum.

4. $4 + (-1)$ _____ 5. $-5 + (-3)$ _____ 6. $-10 + 11$ _____

7. $2 + (-1)$ _____ 8. $-4 + (-1)$ _____ 9. $-6 + 8$ _____

10. $0 + (-6)$ _____ 11. $-7 + 3$ _____ 12. $-3 + (-2)$ _____

Evaluate $n + (-1)$ for each value of n .

13. $n = 6$ _____ 14. $n = -1$ _____ 15. $n = 1$ _____

16. $n = -8$ _____ 17. $n = 10$ _____ 18. $n = -2$ _____

19. When Jermaine played golf today, he scored a +3 on the first hole, a -1 on the second hole, 0 on the third, and a -2 on the fifth. What was Jermaine's total score for the first four holes?

20. The average temperature for December was 3°F below zero. By January, the average temperature had decreased by 3 degrees. What was the average temperature in January?
