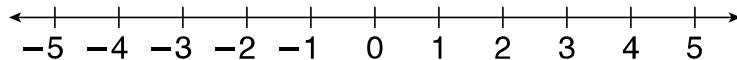


## LESSON

**Practice A****9-2 Comparing and Ordering Integers**

Use the number line to compare each pair of integers.

Write  $<$  or  $>$ .



1.  $4 \square 3$

2.  $1 \square 3$

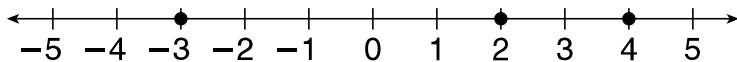
3.  $-2 \square 5$

4.  $-2 \square 2$

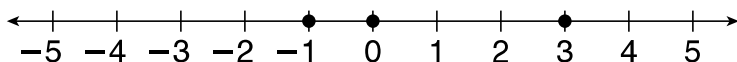
5.  $-5 \square -1$

6.  $0 \square -4$

Use the number lines to order the integers from least to greatest.



7.  $4, -3, 2$  \_\_\_\_\_



8.  $3, -1, 0$  \_\_\_\_\_

Circle the letter of the correct answer.

9. Which set of integers is written from least to greatest?

A 8, 0, 3, -1  
B 3, -1, 0, 8  
C 0, -1, 3, 8  
D -1, 0, 3, 8

10. Which set of integers is written from greatest to least?

F 7, 4, -5, 2  
G 7, -5, 4, 2  
H 7, 4, 2, -5  
J -5, 2, 4, 7

11. Tim and Kylie played golf this morning. Tim scored  $-4$ , Kylie scored  $+3$ . Because the player with the lowest score in golf wins, who won this morning's golf game?

\_\_\_\_\_

12. In Barrow, Alaska, the average temperature in December is  $-11^{\circ}\text{F}$ . In January, the average temperature is  $-13^{\circ}\text{F}$ . In which month is Barrow warmer?

\_\_\_\_\_