

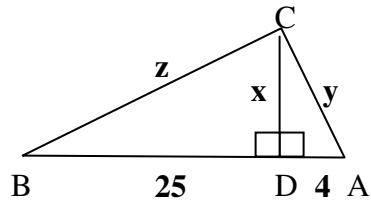
Practice Worksheet for Lesson 8-1 (part II)

Name:

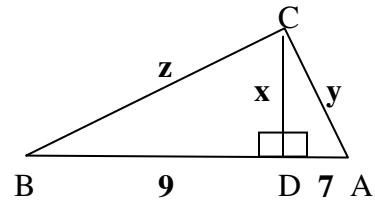
Mailbox #:

Find the value of  $x$ ,  $y$ , and  $z$  for each diagram.

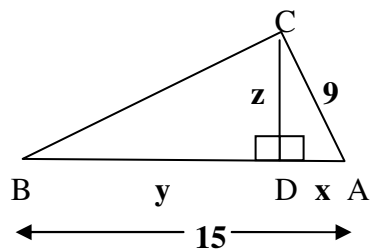
1) Given that  $\angle C = 90^\circ$



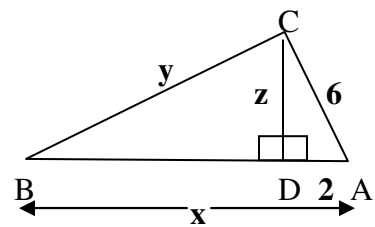
2) Given that  $\angle C = 90^\circ$



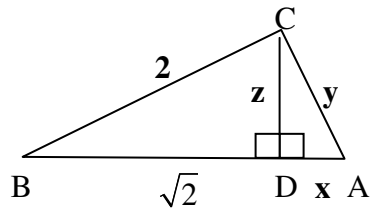
3) Given that  $\angle C = 90^\circ$



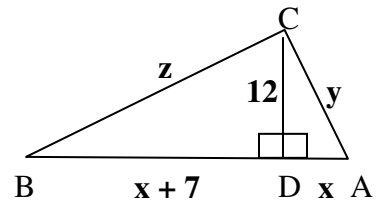
4) Given that  $\angle C = 90^\circ$



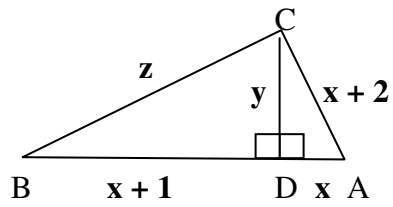
5) Given that  $\angle C = 90^\circ$



6) Given that  $\angle C = 90^\circ$



7) Given that  $\angle C = 90^\circ$



8) Given that  $\angle C = 90^\circ$

