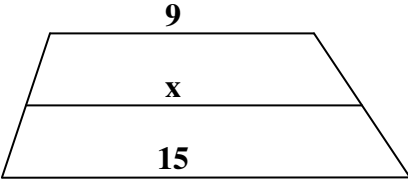
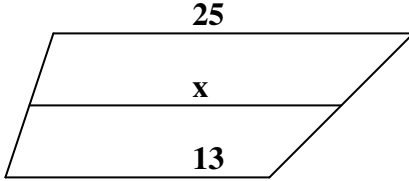
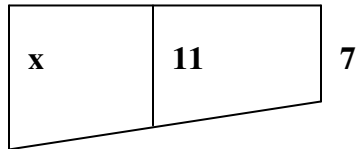
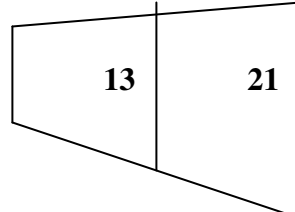
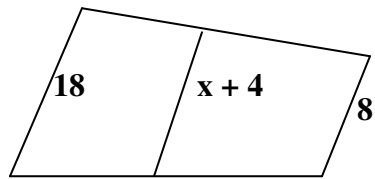
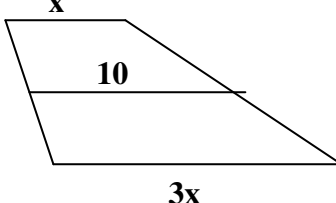
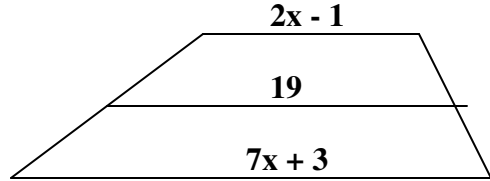
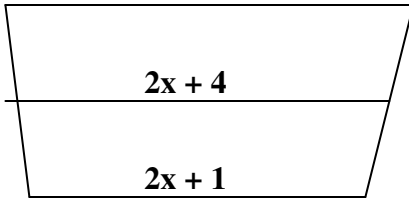


Practice Worksheet for Lesson 5-5

Name:

Mailbox #:

Each diagram shows a trapezoid and its median. Find the value of x for each.

<p>1)</p> 	<p>2)</p> 
<p>3)</p> 	<p>4)</p> 
<p>5)</p> 	<p>6)</p> 
<p>7)</p> 	<p>8)</p> 

9) Two congruent angles of an isosceles trapezoid have measures $3x + 10$ and $5x - 10$. Find the value of x and then give the measures of all four angles.