

Review Worksheet for Lessons 5-1, 5-2 and 5-4

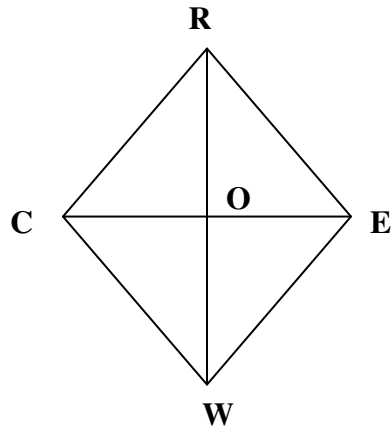
For problems 1-4 refer to parallelogram CREW.

1) If $OE = 4$ and $WE = 8$, name two segments congruent to segment WE

2) If $\overline{WR} \perp \overline{CE}$, name all the angles congruent to $\angle RCE$

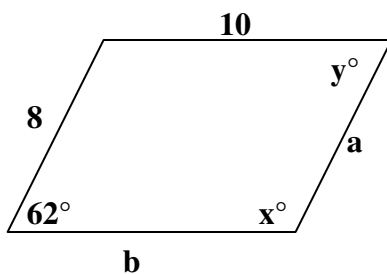
3) If $\overline{WR} \perp \overline{CE}$, name all the segments congruent to segment WE

4) If $RE = EW$, name all angles congruent to $\angle ERW$

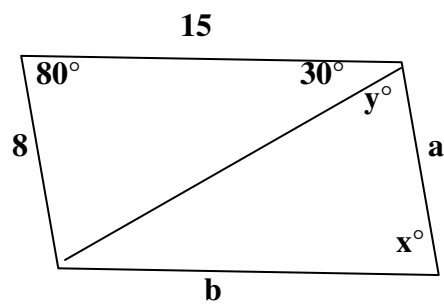


For the given parallelograms, find the value of a , b , x , and y .

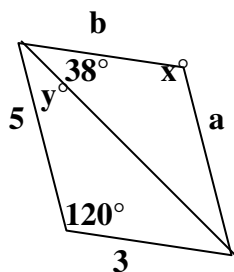
5)



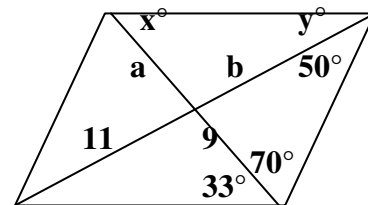
6)



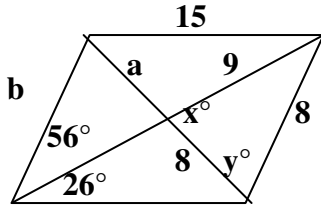
7)



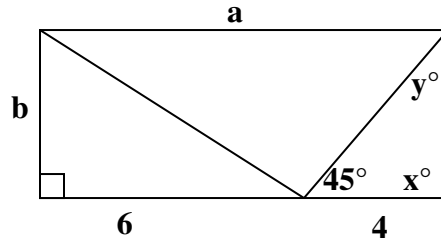
8)



9)

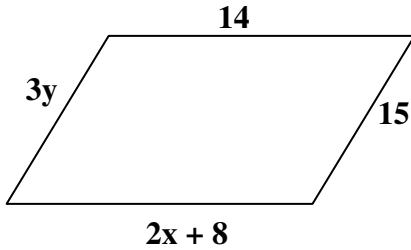


10)

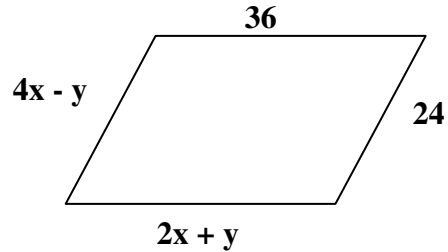


For each of the following parallelograms, find the values of x and y .

11)

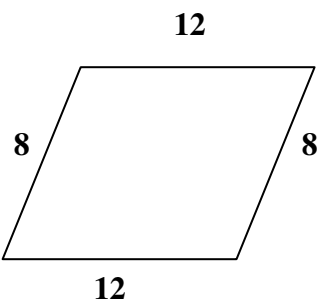


12)

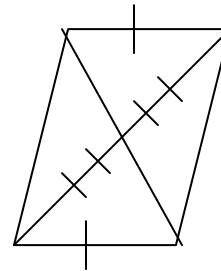


Decide if each figure must be a parallelogram and list the theorem that helped you decide. If it is not a parallelogram just write *no*.

13)

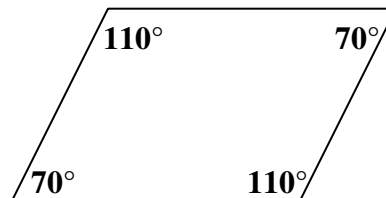



14)



15)

16)





Given that quadrilateral WXYZ is a rectangle, find the following measures.

<p>17) If $WY = 19$, then $ZX =$ _____</p> <p>18) If $WY = 19$, then $WT =$ _____</p> <p>19) If $TX = 4.5$, then $WY =$ _____</p> <p>20) If $WY = 3a + 16$ and $ZX = 5a - 18$, then $a =$ _____</p> <p>21) If $m\angle TWZ = 70^\circ$, then $m\angle TZW =$ _____ and $m\angle WTZ =$ _____</p>	
--	--

Given that quadrilateral ABCD is a rhombus, find the following measures.

<p>22) If $AD = 13$, then $AB =$ _____</p> <p>23) If $m\angle 4 = 25^\circ$, then $m\angle 5 =$ _____</p> <p>24) If $m\angle DAB = 130^\circ$, then $m\angle ADC =$ _____</p> <p>25) If $m\angle 4 = 3x - 2$ and $m\angle 5 = 3x - 8$ then $x =$ _____</p>	
---	--

26) If $m\angle 1 = 5x + 18$ and $m\angle 5 = 3x - 8$, then $x =$ _____	
27) If $m\angle 2 = 3y + 9$ and $m\angle 4 = 2y - 4$ then $y =$ _____	

Given that quadrilateral JKLM is a square, find the following measures.

28) If $MJ = 12$, then $ML =$ _____ and $LK =$ _____	
29) If $MX = 8$, then $XJ =$ _____	
30) If $JL = 18$, then $MK =$ _____	
31) $m\angle MJK =$ _____ and $m\angle MXJ =$ _____	
32) The numbered angles each have a measure of _____°	

Answer Key:

- | | | |
|---|--|--|
| 1) \overline{RC} and \overline{CE} | 2) $\angle REC$, $\angle WCE$, and $\angle WEC$ | 3) \overline{ER} , \overline{RC} , and \overline{CW} |
| 4) $\angle CRW$, $\angle CWR$, and $\angle EWR$ | 5) $a = 8$ $b = 10$ $x = 118^\circ$ $y = 62^\circ$ | |
| 6) $a = 8$ $b = 15$ $x = 80^\circ$ $y = 70^\circ$ | 7) $a = 5$ $b = 3$ $x = 120^\circ$ $y = 22^\circ$ | |
| 8) $a = 9$ $b = 11$ $x = 33^\circ$ $y = 27^\circ$ | 9) $a = 8$ $b = 8$ $x = 56^\circ$ $y = 68^\circ$ | |
| 10) $a = 10$ $b = 4$ $x = 90^\circ$ $y = 45^\circ$ | 11) $x = 3$ $y = 5$ | |
| 12) $x = 10$ $y = 16$ | 13) Theorem 5-4 | 14) no |
| 15) Theorem 5-5 | 16) Theorem 5-6 | 17) $ZX = 19$ |
| 18) $WT = 9.5$ | 19) $WY = 9$ | 20) $a = 17$ |
| 21) $m\angle TZW = 70^\circ$ $m\angle WTZ = 40^\circ$ | 22) $AB = 13$ | 23) $m\angle 5 = 25^\circ$ |
| 24) $m\angle ADC = 50^\circ$ | 25) $x = 9$ | 26) $x = 10$ |
| 28) $ML = 12$ $LK = 12$ | 29) $XJ = 8$ | 27) $y = 17$ |
| | 30) $MK = 18$ | |

31) $m\angle MJK = 90^\circ$ and $m\angle MXJ = 90^\circ$

32) 45°